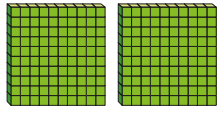
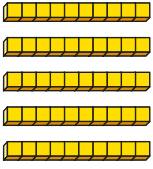



Subtract two numbers (across a 10)



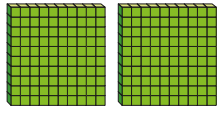
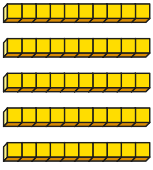

1 Complete the column subtractions.

a) $254 - 123$

Hundreds	Tens	Ones
		

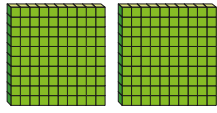
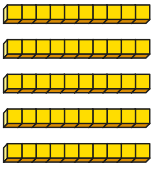

H	T	O
2	5	4
-	1	2

b) $254 - 124$

Hundreds	Tens	Ones
		

H	T	O
2	5	4
-	1	2

c) $254 - 125$

Hundreds	Tens	Ones
		

H	T	O
2	5	4
-	1	2



What is the same about the calculations?
What is different?

2 a) Which of these calculations need an exchange?

H	T	O
6	5	8
-	1	4

H	T	O
3	2	3
-	1	1

H	T	O
4	4	7
-	1	2

How do you know?

b) Complete the column subtractions.

3 Work out the subtractions.

a)

H	T	O
7	3	5
-	2	1

c)

H	T	O
4	1	5
-	1	0

b)

H	T	O
4	8	2
-	1	3

d)

H	T	O
3	8	0
-	1	6



- 4 Tom works out $453 - 218$

$$453 - 218 = 245$$

What mistake has Tom made?

- 5 Ribbon A is 262 cm long.

Ribbon B is 129 cm long.



What is the difference in length between the two ribbons?

cm

- 6 Two classes are raising money for charity.

Class 3 raises £118 less than Class 4

Class 4 raises £426

How much money do both classes raise altogether?

£

- 7 Work out the missing digits.

a)

		H	T	O	
		3	7		
	-	2	0	5	
				8	

b)

		H	T	O	
			6	5	
	-	2	5		
		4		6	

- 8 The subtraction needs an exchange.

		H	T	O	
		7			
	-	5	2		
		2	1	3	

What could the missing digits be?

Find all the possible answers.